

Practice 2

I. Write **even** or **odd**.



8 is an _____ number.



10 is an _____ number.




7 is an _____ number.



16 is an _____ number.

(e)



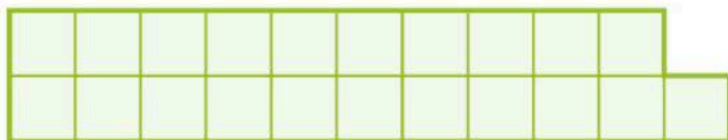
12 is an _____ number.

(f)



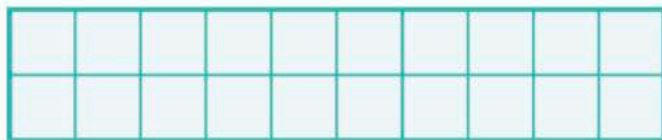
15 is an _____ number.

(g)



21 is an _____ number.

(h)



20 is an _____ number.

Practice 4

I. How many in all?

(a)



$$2 + 2 + 2 = \underline{\hspace{2cm}}$$

$$\underline{\hspace{2cm}} \times \underline{\hspace{2cm}} = \underline{\hspace{2cm}}$$

There are _____ crabs in all.

3 groups of 2



(b)



$$5 + 5 + 5 = \underline{\hspace{2cm}}$$

$$\underline{\hspace{2cm}} \times \underline{\hspace{2cm}} = \underline{\hspace{2cm}}$$

There are _____ seashells in all.

3 groups of 5



(c)



$$10 + 10 + 10 + 10 = \underline{\hspace{2cm}}$$


$$\underline{\hspace{2cm}} \times \underline{\hspace{2cm}} = \underline{\hspace{2cm}}$$

There are marbles in all.

4 groups of 10



(d)



$$\underline{\hspace{2cm}} \times \underline{\hspace{2cm}} = \underline{\hspace{2cm}}$$

There are flowers in all.

7 groups of 5



Practice 2

I. Write the time using **a.m.** or **p.m.**

(a)



in the morning

(b)



in the morning

(c)



in the afternoon

(d)



in the evening

(d)



_____ is 30 minutes after 8:00 a.m.

_____ is 30 minutes before 8:00 a.m.

(e)



_____ is 20 minutes after 12 noon.

_____ is 20 minutes before 12 noon.

(f)

_____ is 20 minutes after 12 midnight.

_____ is 20 minutes before 12 midnight.