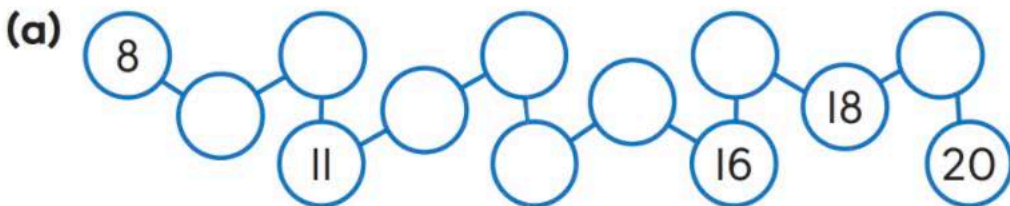


2. Write the missing numbers.



(b) is just before 11.

(c) is just after 11.

(d) is between 9 and 11.

(e) is just before 16.

(f) is just after 16.

(g) is just before 19.

(h) is between 18 and 20.

3. Complete the number patterns.

(a) 

(b) 

(c) 

(d) 

(e) 



20 is _____ than 19.



11 is _____ than 10.



10 is _____ than 11.



20 is _____ than 10.



8

MASTERY AND BEYOND MEASUREMENT



Practice 1

1. Compare the objects by length.

(a) Tick (✓) the object that is **longer**.


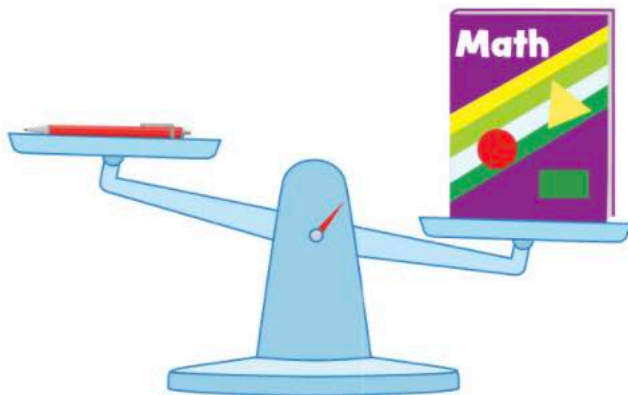


(b) Tick (✓) the object that is **shorter**.






2. Compare the objects by weight.


(a) Tick (✓) the object that is **heavier**.




(b) Tick (✓) the object that is **lighter**.




4. How many are there in all?

(a) 

$$2 + 2 = \square$$

(b) 

$$3 + 5 = \square$$

(c) 

$$6 + 4 = \square$$