

TABLE OF CONTENTS

INTRODUCTORY INFORMATION

Teaching Suggestions iii
How to Use a Chart iv




PUZZLES

Logic 1-10, 31-34, 43
Math 11-20, 35-38
Reading 21-30, 39-42

SOLUTIONS 44

Free resource from www.criticalthinking.com. Commercial redistribution prohibited

Directions: Fill in the chart using Y for yes or N for no as you solve the puzzle.

 boy			
 girl			
 dad			

A boy, a girl, and their dad each has a pet dog.
Use the clues and the chart to find each one's pet.

1. The girl's dog wears a collar and is smaller than her dad's dog.
2. The dad's dog is not the biggest or the smallest.