

Jenny counts 6 oak trees. She counts 2 more oak trees on the nature walk. How many oak trees does Jenny see altogether?

$$6 \bigcirc 2 = \square$$



Joanie finds 9 ladybugs. Then, 2 ladybugs fly away. How many ladybugs does Joanie have left?

$$9 \bigcirc 2 = \square$$



Caden has 3 rocks. He collects 5 more rocks on the nature walk. How many rocks does Caden have now?

$$3 \bigcirc 5 = \square$$



Annie picks 7 wildflowers. She gives 5 to her mother. How many flowers does Annie have left?

$$7 \bigcirc 5 = \square$$

Add



Subtract



There are 16 pumpkins for sale in the patch. Then, 4 pumpkins are sold. How many pumpkins are in the patch now?

Expression: _____

_____ pumpkins

There are 15 pumpkin pies. Then, 3 of the pies get eaten. How many pies are there now?

Expression: _____

_____ pumpkin pies

Ashley eats 22 pumpkin seeds. Then, she eats 70 more. How many pumpkin seeds does she eat?

Expression: _____

_____ pumpkin seeds

Diego buys 46 pumpkin muffins to share at choir practice. Then, he buys 6 more to have enough. How many pumpkin muffins does he have to share?

Expression: _____

_____ pumpkin muffins





A

Amy has 15 pumpkins. She uses 2 pumpkins to make a pie. How many pumpkins does she have now?

D

$$16 - 3 = \underline{\quad}$$

B

Ellie collects 10 big pumpkins. She gives 5 to her brother. How many pumpkins does Ellie have now?

E

$$15 + 20 = \underline{\quad}$$


C

Sam paints 24 pumpkins. Then he paints 8 more. How many painted pumpkins does Sam have now?

F

$$30 + 40 = \underline{\quad}$$








Amelia sees 4 penguins at the aquarium. James sees 9 penguins. How many more penguins does James see than Amelia?

Alex has 19 tickets to play games at the aquarium. He uses 3 tickets. How many tickets does Alex have left?

Ellie goes to 5 exhibits at the aquarium. Her brother goes to 8 exhibits. How many fewer exhibits does Ellie go to than her brother?



Crew sees 17 marine animals at the aquarium. There are 14 animals that have stripes, and the rest do not. How many animals do not have stripes?



Vivian watches 18 fish swim to the cave in the aquarium. Then, 2 more fish join them in the cave. How many fish are now in the cave?



Kai's family buys 12 snacks at the aquarium. There are 6 salty snacks, and the rest are sweet. How many snacks are sweet?

Cam sees 3 sharks at the aquarium. Her cousin sees 6 sharks. How many fewer sharks does Cam see than her cousin?



_____ fewer sharks

Dan watches 12 seahorses get food. Then, 5 more get food. How many seahorses get food?




_____ seahorses




There are 18 dolphins at the aquarium. McKenna sees 2 of them. How many dolphins are left for McKenna to see?

_____ dolphins

Bill sees 13 fish in one tank. There are 8 yellow fish, and the rest are orange. How many orange fish does Bill see?



_____ orange fish





$$10 - 7 = 3$$

$$11 - 2 = 9$$

$$4 + 6 = 10$$

$$14 = 3 + 11$$

$$15 = 8 + 7$$

$$3 + 2 = 5$$

$$12 - 9 = 3$$

$$13 + 2 = 15$$

$$19 - 5 = 14$$



$$3 + 2 = 5$$

$$14 = 3 + 11$$

$$12 - 9 = 3$$

$$15 = 8 + 7$$

$$11 - 2 = 9$$

$$10 - 7 = 3$$

$$19 - 5 = 14$$

$$4 + 6 = 10$$

$$13 + 2 = 15$$





A

Bryan buys 3 snacks at the aquarium. Olivia buys 5 snacks. How many more snacks does Olivia buy than Bryan?




B

Collin buys 7 tickets to the aquarium. Skylar buys 10 tickets. How many fewer tickets does Collin buy than Skylar?



C

There are 11 toy fish available to purchase at the aquarium store. Felix buys 2 toy fish. How many are left?



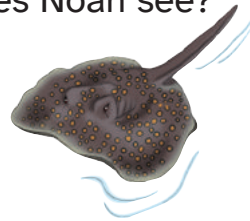
D

Nadia sees 4 spotted seals lying on their backs. Then, 6 more spotted seals join them. How many spotted seals are there now?




E

Noah sees 14 stingrays at the aquarium. There are 3 little stingrays, and the rest of the stingrays are big. How many big stingrays does Noah see?



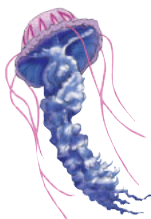
F

Mia sees 15 pieces of coral at the aquarium. Some of the pieces are pink, and 7 are yellow. How many pieces of pink coral does Mia see?



G

The large tank at the aquarium has 19 jellyfish. The small tank has 5 jellyfish. How many more jellyfish are in the large tank?



H

The large tank has 13 sea stars. The small tank has 2 sea stars. How many sea stars are there altogether?



I

Naomi sees 12 turtles. She watches as 9 turtles swim away. How many turtles are left?

